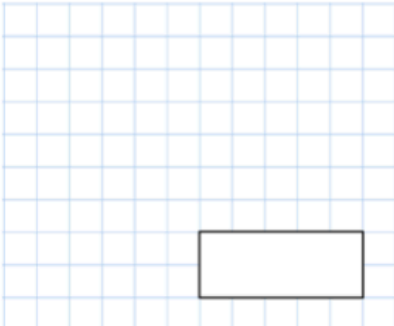
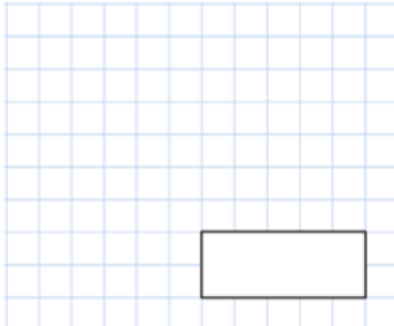
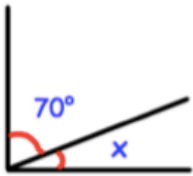
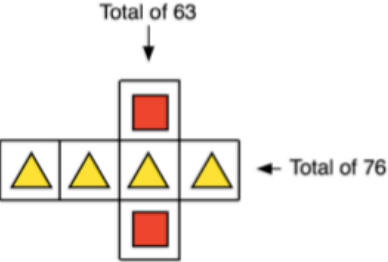


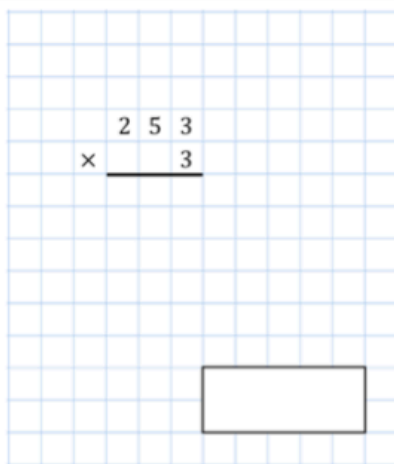
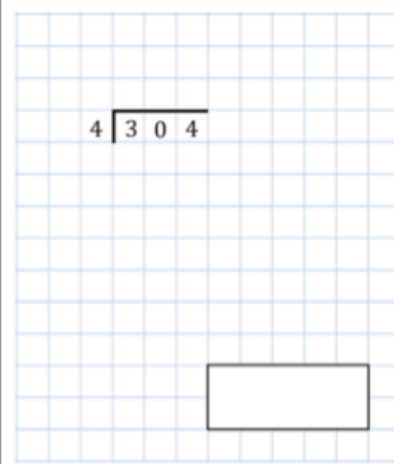

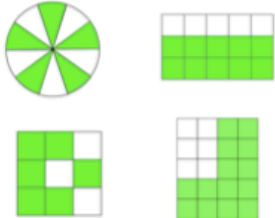


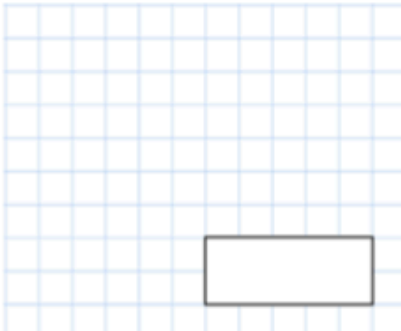
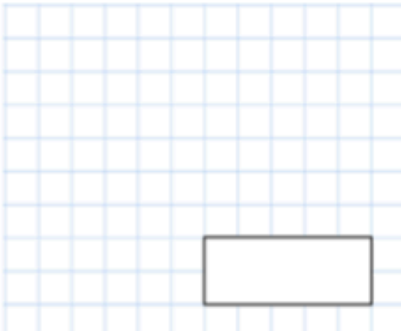

Day 1-

| | |
|--|---|
| <p>$60,000 - 600$</p>  <p style="text-align: center;"><input type="text"/></p> | <p>20×100</p>  <p style="text-align: center;"><input type="text"/></p> |
|  | <p>Shown is a right angle</p> <p>Calculate the size of angle x</p> |
| <p>Total of 63</p>  <p style="text-align: right;">← Total of 76</p> <p>Each shape stands for a number.</p> <p>Work out the value of each shape</p> | <p style="text-align: center;">  = _____  = _____ </p> |

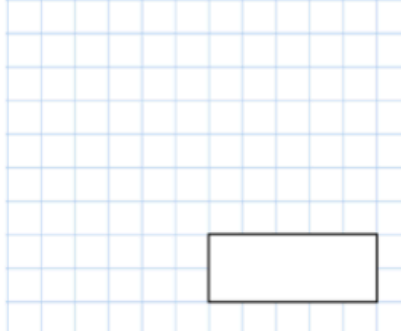
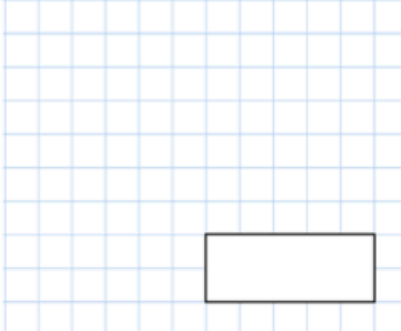
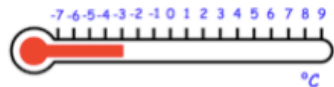
Day 2-

| | |
|--|--|
|  <p style="text-align: center;"> $\begin{array}{r} 253 \\ \times \quad 3 \\ \hline \end{array}$ </p> <p style="text-align: center;"><input type="text"/></p> |  <p style="text-align: center;"> $4 \overline{) 304}$ </p> <p style="text-align: center;"><input type="text"/></p> |
| <p>What type of triangle is shown?</p> |  |
| <p>At 9am, there were 812 cars in a car park.</p> <p>By 10am, 37 cars had left the car park 151 cars had entered the car park</p> | <p>How many cars are there in the car park at 10am?</p> |
| <p>Tick the two shapes that have $\frac{2}{3}$ shaded</p> |  |

Day 3-

| | |
|--|---|
| $92 \div 4$  | 245×3  |
| <p>728 people went to a rugby match. Tickets were £5 each. How much money was paid in total?</p> | |
|  | <p>What day of the week is May 20th?</p> |
| <p>What date is the 3rd Tuesday in April?</p> | <p>Jordan works every Monday, Tuesday and Friday. How many days does Jordan work in May?</p> |

Day 4-

| | |
|---|--|
| $\frac{7}{8} - \frac{1}{8}$  | $9,090 - 201$  |
| <p>Write the number 15,106 in words</p> | |
|  <p>The thermometer shows the temperature at 4am in a town. The temperature increase by 8°C by 10am</p> | <p>What is the temperature at 10am?</p> |
| <p>Kali is doing sit-ups She does 7 sit-ups every ten seconds. How many sit-ups does she do in two minutes?</p> | |